

Şekil Sayı Eşleştirme

+

= 7

□

= 6

⬠

= 0

×

= 4

◊

= 9

△

= 3

○

= 8

→

= 2

▽

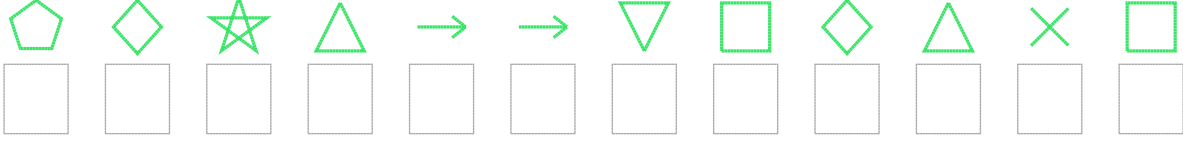
= 5

☆

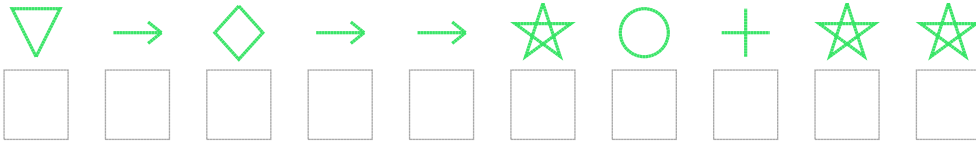
= 1

Aşağıdaki uzun şifreleri hatasız çözerek altlarına yazın:

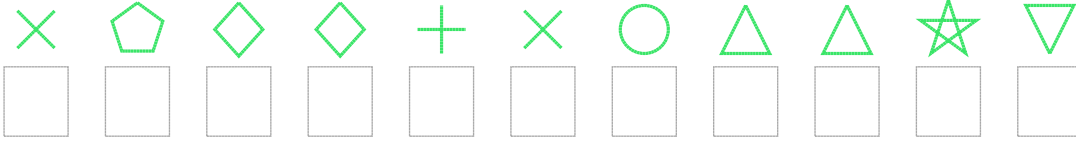
1. Şifre



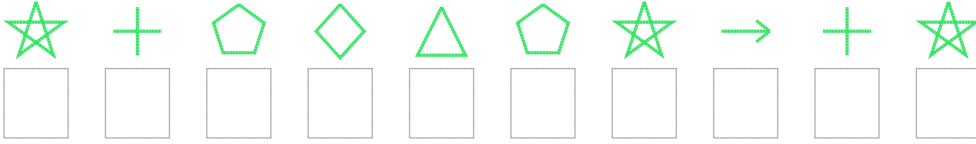
2. Şifre



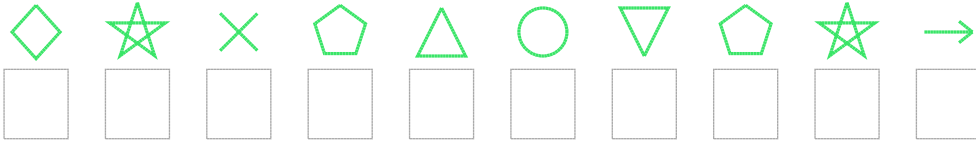
3. Şifre



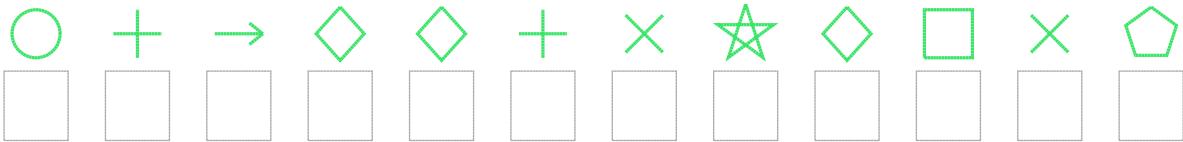
4. Şifre



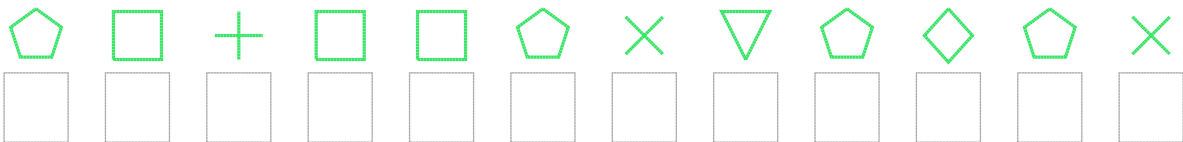
5. Şifre



6. Şifre



7. Şifre



□ BONUS: 6. ve 5. şifrenin ikinci rakamının toplamı kaçtır?

Cevap Anahtarı

1. Şifre: 091322569346

2. Şifre: 5292218711

3. Şifre: 40997483315

4. Şifre: 1709301271

5. Şifre: 9140385012

6. Şifre: 872997419640

7. Şifre: 067660450904

□ Bonus Soru Cevabı: 8